

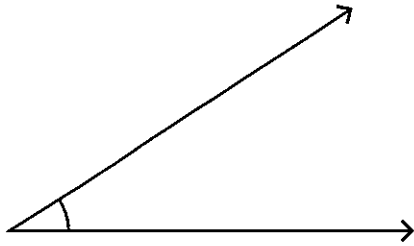
Measuring Angles

Moderate: S3

5.5 HW

Measure each angle using protractor.

1)



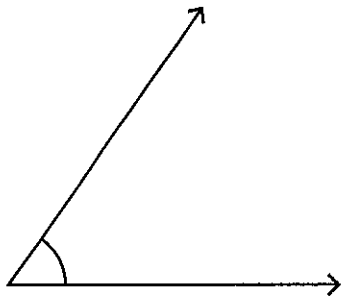
Angle: _____

2)



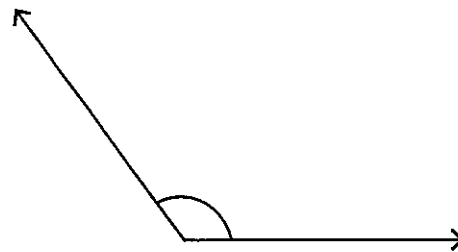
Angle: _____

3)



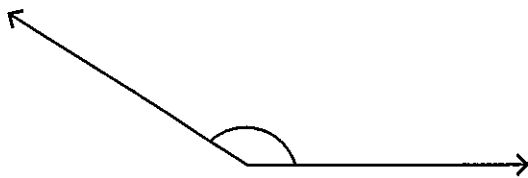
Angle: _____

4)



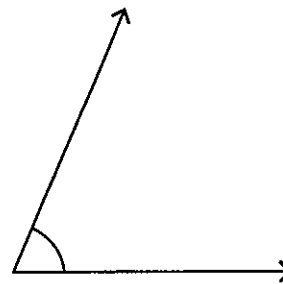
Angle: _____

5)



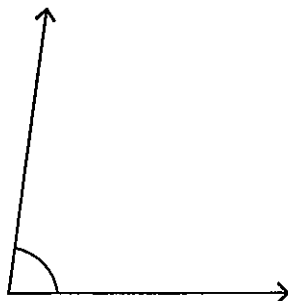
Angle: _____

6)




Angle: _____


7)



8)



3) 134°



4) 60°



5) 146°



6) 24°

